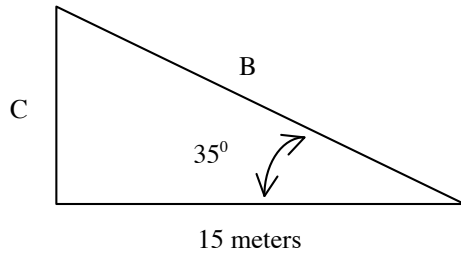


Trigonometry Review

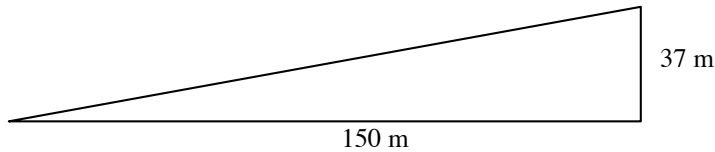
Physics 111

Name: _____

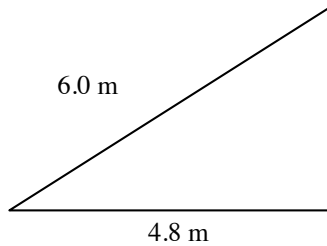
1. Find the length of the sides labeled B and C in the triangle below. Show all of your work.



2. Find the length of the unknown side of the triangle below.



3. Find the length of the unknown side of the triangle below.



4. Find the three angles labeled a, b, and c in the triangle below, **and** find the length of the missing side.

